

NAME: _____ DATE: _____ PERIOD: _____

PROMOTIONAL EXAMINATION

CADET CORPORAL

1. Define the following drill terms:

a. file---

b. flank (formation)---

c. element---

d. rank (formation)---

2. Indicate on which foot the following commands would be given---

a. column half-left---

b. count cadence count---

c. right oblique---

d. halt---

3. List seven of the general orders:

4. What is the normal rank of the Platoon leader? _____

5. If a squad is carrying weapons, what three commands are necessary to dismiss the squad?

(1)

(2)

(3)

6. Give the magazine capacity of the 1903 _____
7. Give the barrel length of the 1903 model _____
8. The range of the 30.06 cartridge is _____
9. What type of rear sight does the 1903 rifle have _____
10. Define recoil.

11. What operates the mechanism of the M-1 rifle _____
12. How many rounds does the M-1 Garand clip hold _____
13. What is the rear sight of the M-1 called _____
14. What is the weight of the M-1 _____
15. Name the five pressure points.

16. What is the purpose of first aid?
17. Define shock.
18. What is the treatment for shock when the wounded man has a head wound?
19. What is the treatment for a first degree burn?
20. A tourniquet should be placed between the wound and the _____.
21. What is the danger of a sucking chest wound?
22. A tourniquet should be loosened every fifteen minutes. True False
23. What are three duties of a private of the guard.

24. What is the rear sight of the .22 cal target rifle called _____.

CADET PROMOTIONAL EXAM

"Acting" Cadet First Class

10th Bn, HJHS, CCC

1. If it is true that you do most of your saluting out of doors, then at how many paces distance from an Officer do you normally salute? _____.
2. When approaching an Officer you do not have to salute unless he does. T F
3. When the command "Forward March" is given you start off on which foot? _____
4. Which foot do you pivot on when executing Right Face? _____.
5. Give an Example of a "Preparatory Command" and a "Command of Execution"?
6. When standing at Parade Rest, how far apart are your feet? _____, and where are the right and left hands placed? _____.
7. Which foot is moved when you go from the position of Attention to At Ease? _____
8. Indicate the correct procedure for reporting to an Officer in the Orderly Room, if he has bent for you. Give description in detail—Use rear of this sheet if necessary—
9. Where did Saluting an Officer get its first beginning and what is the purpose of a salute?
10. When in the Prone position at what degree is the angle of the body? _____°
11. In the sitting position you always make sure the elbow is in good firm contact with the knee cap. True False
12. When you Fall In into a Platoon formation you automatically do what?
13. In Rifle Marksmanship you use the _____ Sling for the Prone, Sitting, and Kneeling Positions.
14. In Rifle Marksmanship you use the _____ Sling for the Standing or Offhand position.
15. Identify the indicated parts on the attached diagram of the 1903 Springfield rifle:

NAME: _____ DATE: _____ PERIOD: _____

PROMOTIONAL EXAMINATION

CADET FIRST CLASS

1. List ten of the Cadet Code Principles: "A Cadet is--

2. What does it mean "A Cadet is Responsible?"

3. When on the Rifle Range you should never cock the weapon except when you are aiming at the target. True False

4. After you have completed firing, when on a Rifle Range, you should do which of the following:
 - (a) unload weapon (b) open bolt (c) lock weapon (d) all of these

5. The first thing you should do when handed a weapon of any kind is to--

6. On a range the Range Officer will be in absolute command. True False

7. There can be more than one Range Officer. True False

8. If you have an unfired cartridge after you are finished firing on the range you should get rid of it by throwing it into the trash so no one will get hold of it. True False

9. When on the range a "misfire" (cartridge which doesn't go off when the weapon is fired) is to be handled carefully but it is not dangerous.

10. When double timing and you approach an officer what should you do?

11. What is military courtesy?

12. If directed to report to the Company Commander in the Orderly Room what is the reporting procedure?

13. What is the normal length of stride while marching:
 (a) 20 inches (b) 36 inches (c) 12 inches (d) 15 inches (e) None of these

14. Define the following terms (these terms are used in Dismounted Drill)

- (a) element---
- (b) file---
- (c) column---
- (d) quick time---

15. How many counts of movement are required to perform the following:

- (a) order arms to right shoulder arms _____
- (b) port arms to order arms _____
- (c) inspection arms to order arms _____
- (d) order arms to left shoulder arms _____
- (e) left shoulder arms to order arms _____

16. At what degree of angle is your rifle when at the position of port arms _____
 And where is the right and left hand placed on the rifle

17. Draw a diagram of a platoon in a column formation:

18. How many men in a normal U.S. Army rifle squad? _____

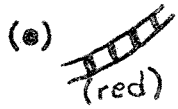
19. How many squads in a U. S. Army platoon? _____

20. How many rifle squads in a U.S. Army rifle platoon _____

21. On which foot is the command "Rear March" given? _____

22. Identify the following map symbols (found on military topographical maps):





23. List the three life saver steps in their proper order:

(a) _____ (b) _____ (c) _____

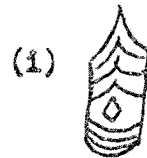

24. The following are three ways of checking blood flow: True False
(a) pressure (b) elevation (c) tourniquet

25. You should never move an injured person unless it is absolutely necessary.
True False

26. Infection is a great danger in any type of wound no matter how small.
True False

27. The arteries bring the blood from the heart and distribute this blood to the veins and from the veins to the smaller capillaries. True False

28. Identify the following insignia: U.S. Army and California Cadet Corps



NAME: _____ DATE: _____ PERIOD: _____

PROMOTIONAL EXAMINATION

CADET CORPORAL

1. Define the following drill terms:

a. file---

b. flank (formation)---

c. element---

d. rank (formation)---

2. Indicate on which foot the following commands would be given---

a. column half-left---

b. count cadence count---

c. right oblique---

d. halt---

3. List seven of the general orders:

4. What is the normal rank of the Platoon leader? _____

5. If a squad is carrying weapons, what three commands are necessary to dismiss the squad?

(1)

(2)

(3)

6. Give the magazine capacity of the 1903 _____
7. Give the barrel length of the 1903 model _____
8. The range of the 30.06 cartridge is _____
9. What type of rear sight does the 1903 rifle have _____
10. Define recoil.

11. What operates the mechanism of the M-1 rifle _____
12. How many rounds does the M-1 Garand clip hold _____
13. What is the rear sight of the M-1 called _____
14. What is the weight of the M-1 _____
15. Name the five pressure points.

16. What is the purpose of first aid?
17. Define shock.
18. What is the treatment for shock when the wounded man has a head wound?
19. What is the treatment for a first degree burn?
20. A tourniquet should be placed between the wound and the _____.
21. What is the danger of a sucking chest wound?
22. A tourniquet should be loosened every fifteen minutes. True False
23. What are three duties of a private of the guard.

24. What is the rear sight of the .22 cal target rifle called _____.

NAME: _____ DATE: _____ PERIOD: _____

PROMOTIONAL EXAMINATION

CADET BUCK SERGEANT

1. Define the following terms:

- a. column---
- b. file---
- c. flank of a formation---
- d. normal interval---
- e. cadence---

2. Indicate on which foot the following marching commands would be given:

- a. column half left---
- b. rear march---
- c. right oblique---
- d. left oblique---
- e. count cadence count---
- f. halt from the oblique---
- g. halt---
- h. left flank---

3. List the following General Orders -1,4,6,9,10, 11 (use rear of this sheet)

4. What is the normal Cadet rank for the Bn. Commander of a Cadet Battalion _____




5. What is the normal rank of a platoon leader (Cadet) _____

6. If a squad is carrying weapons, what are the three commands needed to dismiss the squad?

7. In marching at the oblique, what command causes the men to halt facing the same direction they have been marching? _____ Halt!

8. In a squad what numbered (1-9) men are the "Stack" men in Stack Arms?

9. Identify the following map symbols found on a military map:



10. Identify the following military insignia and Cadet Corps insignia:



Gold Oak Leaf



Gold

11. Indicate the three ways to stop severe bleeding:

12. Making a victim comfortable, keeping him warm and elevating his feet and lowering his head helps to prevent what?

13. List three duties of the sergeant of the guard.

14. What is the rank of a company commander _____

15. What is the rank of a squad leader _____

16. The company has a variety of equipment. Name two such pieces of equipment--

17. How many officers does the Cadet company have at present _____

18. How many enlisted men does the Cadet company have at present _____

19. (true or false) _____ Are there other types of companies in the army (Tank company, etc.) _____

20. (true or false) _____ The Romans improved the phalanx formation.







NAME: _____ DATE: _____ PERIOD: _____

PROMOTIONAL EXAMINATION

CADET STAFF SERGEANT

1. List three duties of the Commander of the Guard.
2. There are various officers under the Commander of a Battalion besides his staff. List three such officers.
3. (true or false) _____ The Battalion is the smallest unit with a staff.
4. What is the job of the S-1 on the Battalion staff (one word answer).
5. What is the job of the S-4 on the Battalion staff (one word answer).
6. What is the normal rank of a Battalion Commander _____
7. (true or false) _____ The Battalion Executive is not in charge of the staff.
8. You can give a platoon a column while in flank formation (true or false).

9. List twelve of the Cadet Code Principles (use the back of the paper is necessary).
10. _____ (true or false) The Greeks used the phalanx formation.
11. _____ The catapult was based on what principle--(a) torsion (b) tension
(c) spring.
12. What is a scarp?
13. How long was the Brown Bess Musket? _____

14. What is a weakness of the Brown Bess Musket?
15. Explain rifling—
16. (true or false) _____ The Romans improved the phalanx formation.
17. (true or false) _____ On a battlefield, you leave a tourniquet on for 15 minutes, then you loosen it.
18. (true or false) _____ The Roman short sword was used for short, chopping blows.
19. What would you do to a man who is found with a leg swollen below the knee, has a vacant stare in his eyes, is cold and clammy, and whose head is awkwardly twisted? The terrain does not offer any available material useable for splints.
20. What are the advantages and disadvantages of the four basic squad tactical maneuvers.
21. Identify the following military insignia and Cadet Corps insignia:
- (a)  _____
- (d)  - Silver _____
- (b)  - Gold _____
- (e)  - Silver _____
- (c)  _____
- (f)  - Gold _____
22. How many officers does the Cadet Company have at present _____
23. How many _____ enlisted men does the Cadet Company have at present _____
24. In a squad what numbered (1-9) men are the "Stack" men in Stack Arms? _____
25. List three duties of the sergeant of the guard.

26. Define the following terms:

a. column--

b. file--

c. flank of a formation--

d. normal interval--

e. cadence--

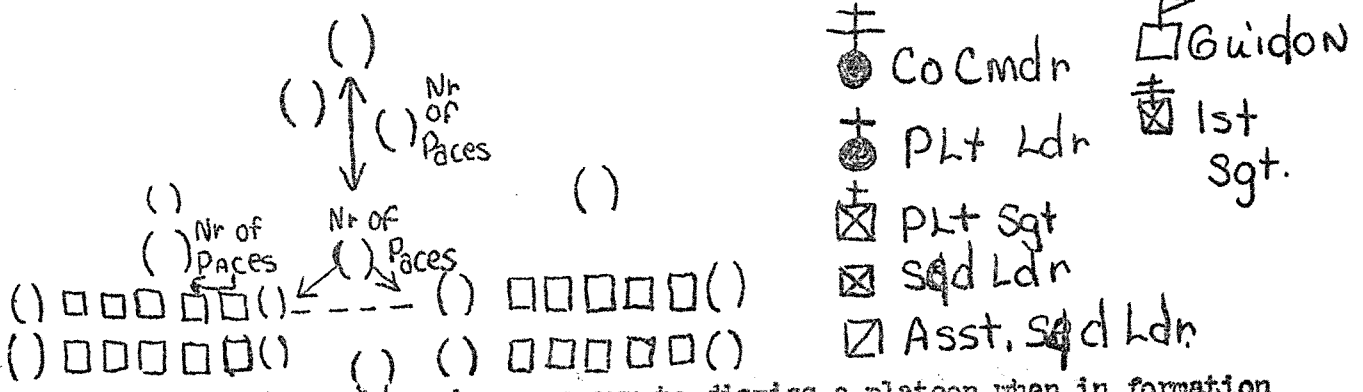
27. List the following General orders--1,4,6,9,10,11

28. In marching at the oblique, what command causes the men to halt facing the same direction they have been marching? Halt!

NAME: _____ DATE: _____ PERIOD: _____

PROMOTIONAL EXAMINATION SERGEANT FIRST CLASS

1. In the diagram below you are to place the correct symbols in their correct positions in Platoon drill. Use the symbols on the right of the diagram. Make sure you use the right symbol for the right position in these two formation. Be sure to fill in all the parenthesis in the diagram.



2. What are the three commands necessary to dismiss a platoon when in formation and carrying arms.

- (a) _____
- (b) _____
- (c) _____

3. What is the normal marching formation for a platoon? _____

4. Define the following drill terms:

- a. column---
- b. file---
- c. rank---
- d. line---
- e. interval---
- f. base (squad, platoon, etc.)---
- g. depth of a formation---

5. When at a halt to form a single file from a column of twos the commands are:

6. Indicate the number (1-9) of the stack men in a squad when stacking arms---

7. When marching at a right oblique, on which foot is the command halt given?

PROMOTIONAL EXAMINATION CADET SERGEANT FIRST CLASS

8. On which foot is the command halt given when marching at left oblique _____
9. If a squad is standing in a line, what is the command to Take Interval?
10. What are two of the most important things you would tell a new Cadet about his sight picture in Rifle Marksmanship?
 - (a)
 - (b)
11. What do the letters B.R.A.S.S. stand for in rifle marksmanship?
12. How many men in a normal U.S. Army squad? _____
13. How many men in the Cadet platoon at present (1st plt. _____)
14. How many Rifle Platoons in a Rifle Company? _____
15. When do you salute an officer indoors. Indicate an example or two:
16. What does the term "Military Courtesy" mean:
17. On the back of this sheet list the 11 general orders (in order):
18. What are the five special types of wounds?
 - (a)
 - (b)
 - (c)
 - (d)
 - (e)
19. In map problems what are the two ways taught to you to figure distance?

20. Where is Grid North on a Topographical Map? (Military type) _____

PROMOTIONAL EXAMINATION CADET SERGEANT FIRST CLASS

21. At the bottom of a topographical map there are three scales for estimating distance. What is each one called?

_____ scale
_____ scale _____ scale

22. How would you find the contour interval on a topographical map? _____

23. On a topographical map there are three types of north. List three below---

_____ north _____ north
_____ north

24. The greatest danger in handling burns is from infection? (true or false) _____

25. Define the following terms---

(a) shock---

(b) grid---

(c) rifle nomenclature---

26. What is the rank of a regimental commander? _____

27. What are the main elements of the Pentomic Army organization (name four).